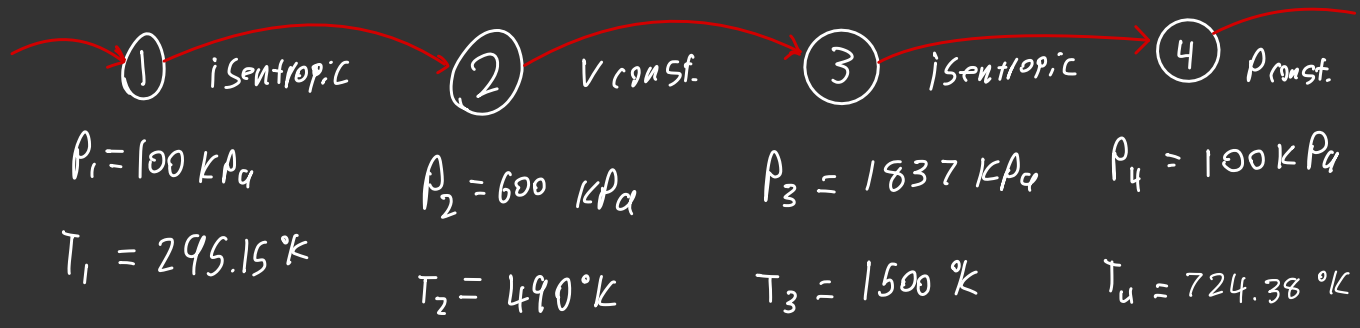
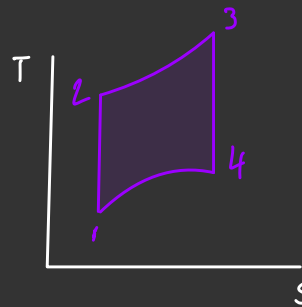
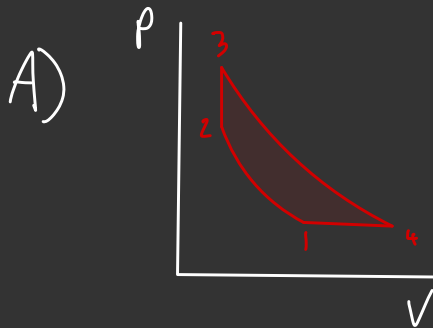


**9-13** An air-standard cycle with variable specific heats is executed in a closed system and is composed of the following four processes:

- 1-2 Isentropic compression from 100 kPa and 22°C to 600 kPa
  - 2-3  $v = \text{constant}$  heat addition to 1500 K
  - 3-4 Isentropic expansion to 100 kPa
  - 4-1  $P = \text{constant}$  heat rejection to initial state
- (a) Show the cycle on  $P$ - $v$  and  $T$ - $s$  diagrams.  
 (b) Calculate the net work output per unit mass.  
 (c) Determine the thermal efficiency.

Use Table A-17  
for variable specific  
heats.



1  $\rightarrow$  2

using equation  
and table A-17  
to find temp at  $P_2$

$$\frac{P_1}{P_2} = \frac{P_{r1}}{P_{r2}}$$

$$\frac{100 \text{ kPa}}{600 \text{ kPa}} = \frac{1.3068}{P_{r2}}$$

$$P_{r2} = 7.84 \approx 7.824$$

within 1%

$$T_2 = 490 \text{ K}$$

2  $\rightarrow$  3

$$\frac{P_3}{P_2} = \frac{T_3}{T_2}$$

$$\frac{P_3}{600 \text{ kPa}} = \frac{1500 \text{ K}}{490 \text{ K}}$$

$$P_3 = 1837 \text{ kPa}$$

3 → 4

Using equation

and table A-17

to find temp at  $P_{r4}$

$$\frac{P_4}{P_3} = \frac{P_{r4}}{P_{r3}}$$

$$\frac{100 \text{ kPa}}{1837 \text{ kPa}} = \frac{P_{r4}}{601.9}$$

$$P_{r4} = 32.77$$

Linear Interpolation

720	734.82	32.02
730	745.62	33.72

$$T_4 = 724.38 \text{ } ^\circ\text{K}$$

B)  $W_{net} = \dot{Q}_{in} - \dot{Q}_{out}$

$$\dot{Q}_{in} = U_3 - U_2$$

$$\dot{Q}_{out} = h_4 - h_1$$

from Table A-17

$$U_2 = 352 \text{ kJ/kg}$$

$$U_3 = 1205.41 \text{ kJ/kg}$$

$$h_1 = 295.17 \text{ kJ/kg}$$

$$h_4 = 740 \text{ kJ/kg}$$

Linear interp.

$$\dot{Q}_{in} = 1205.41 - 352 = 853.41 \text{ kJ/kg}$$

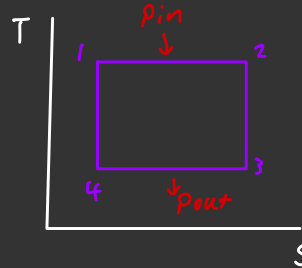
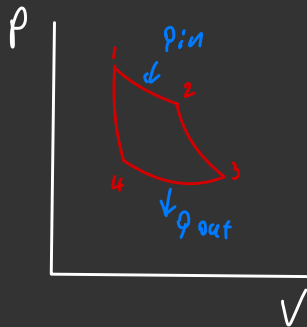
$$\dot{Q}_{out} = 740 - 295.17 = 444.83 \text{ kJ/kg}$$

$$W_{net} = 408.58 \text{ kJ/kg}$$

C)  $\eta_{th} = \frac{W_{net}}{\dot{Q}_{in}}$

$$\eta_{th} = \frac{408.58}{853.41} = 0.47876 = 47.88\%$$

**9-18** An air-standard Carnot cycle is executed in a closed system between the temperature limits of 350 and 1200 K. The pressures before and after the isothermal compression are 150 and 300 kPa, respectively. If the net work output per cycle is 0.5 kJ, determine (a) the maximum pressure in the cycle, (b) the heat transfer to air, and (c) the mass of air. Assume variable specific heats for air. *Answers: (a) 30.0 MPa, (b) 0.706 kJ, (c) 0.00296 kg*



①  $T_{const.}$  → ②  $Adiabatic$  → ③  $T_{const.}$  → ④  $Adiabatic$

$$P_1 = 30.013 \text{ kPa}$$

$$P_2 =$$

$$P_3 = 150 \text{ kPa}$$

$$P_4 = 300 \text{ kPa}$$

$$T_1 = 1200 \text{ °K}$$

$$T_2 = 1200 \text{ °K}$$

$$T_3 = 350 \text{ °K}$$

$$T_4 = 350 \text{ °K}$$

4 → 1

using equation  
and table A-17  
to find temp at  $P_2$

$$\frac{P_1}{P_4} = \frac{P_{r1}}{P_{r4}}$$

$$\frac{P_1}{300 \text{ kPa}} = \frac{238}{2.379}$$

$$P_1 = 30.013 \text{ kPa}$$

$$A) P_{max} = 30.013 \text{ kPa}$$

$$B) P_{in} = w_{net} / \eta_{th}$$

$$P_{in} = 0.5 / \left( 1 - \frac{350}{1200} \right) = 0.70588 \text{ kJ}$$

C) ??

Note to prof.: I was doing this

close to the dead line, so I skipped this  
part. I have work in the morning.

**9-22** An ideal gas is contained in a piston-cylinder device and undergoes a power cycle as follows:

- 1-2 isentropic compression from an initial temperature  $T_1 = 20^\circ\text{C}$  with a compression ratio  $r = 5$
- 2-3 constant pressure heat addition
- 3-1 constant volume heat rejection

The gas has constant specific heats with  $c_v = 0.7 \text{ kJ/kg}\cdot\text{K}$  and  $R = 0.3 \text{ kJ/kg}\cdot\text{K}$ .

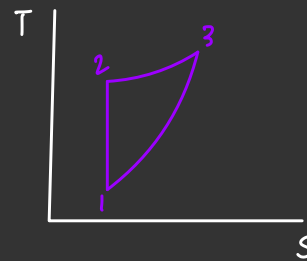
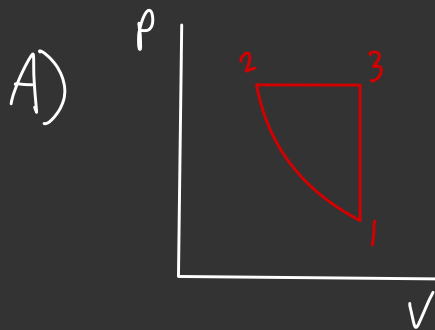
- (a) Sketch the  $P$ - $v$  and  $T$ - $s$  diagrams for the cycle.
- (b) Determine the heat and work interactions for each process, in  $\text{kJ/kg}$ .
- (c) Determine the cycle thermal efficiency.
- (d) Obtain the expression for the cycle thermal efficiency as a function of the compression ratio  $r$  and ratio of specific heats  $k$ .

$$c_p = c_v + R$$

$$c_p = 0.7 + 0.3 = 1 \text{ kJ/kg}\cdot\text{K}$$

$$k = \frac{c_p}{c_v}$$

$$k = 1/0.7 = 1.4286$$



Assume  
1 atm  $P_1 = 100 \text{ kPa}$

$$P_2 = 996.75 \text{ kPa} \quad P_3 = 996.75 \text{ kPa}$$

$$T_1 = 293.15^\circ\text{K} \quad T_2 = 584.34^\circ\text{K} \quad T_3 = 2921.7^\circ\text{K}$$

$$r = 5$$

$$1 \rightarrow 2$$

$$T_2 = (T_1 \cdot r)^{k-1}$$

$$T_2 = 293.15(5)^{0.4286}$$

$$T_2 = 584.34^\circ\text{K}$$

$$\frac{T_2}{T_1} = \left( \frac{P_2}{P_1} \right)^{\frac{k-1}{k}}$$

$$\frac{584.34^\circ\text{K}}{293.15}$$

2 → 3

$$\frac{T_3}{T_2} = \frac{V_3}{V_2} = r$$

$$T_3 = 584.34^\circ\text{K} \cdot 5$$

$$T_3 = 2921.7^\circ\text{K}$$

B)

$$W_{1-2} = c_v (T_2 - T_1) = 0.7 \cdot (584.34 - 293.15) = \underline{203.9 \text{ kJ/kg}}$$

$$Q_{1-2} = \underline{0 \text{ kJ/kg}}$$

$$W_{2-3} = R (T_3 - T_2) = 0.3 (2921.7 - 584.34) = \underline{701.2 \text{ kJ/kg}}$$

$$Q_{2-3} = c_p (T_3 - T_2) = 1 (2921.7 - 584.34) = \underline{2337.4 \text{ kJ/kg}}$$

$$W_{3-1} = \underline{0 \text{ kJ/kg}}$$

$$Q_{3-1} = c_v (T_3 - T_1) = 0.7 (2921.7 - 293.15) = \underline{1840 \text{ kJ/kg}}$$

$$C) \quad \eta_{th} = \frac{W_{net}}{Q_{in}} = \frac{701.2 - 203.9}{2337.4} = 0.213$$

$$\boxed{21.3 \%}$$

9-31 An ideal Otto cycle has a compression ratio of 10.5, takes in air at 90 kPa and 408C, and is repeated 2500 times per minute. Using constant specific heats at room temperature, determine the thermal efficiency of this cycle and the rate of heat input if the cycle is to produce 90 kW of power.

$$k = 1.4 \quad r = 10.5$$

$$\eta_{th} = 1 - \frac{1}{r^{k-1}} = 1 - \frac{1}{10.5^{1.4-1}} = 0.6096$$

$$60.96\%$$

$$\dot{Q}_{in} = \frac{\dot{W}_{net}}{\eta_{th}} = \frac{90 \text{ kW}}{0.6096} = 147.64 \text{ kW}$$